


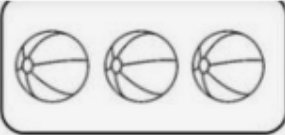







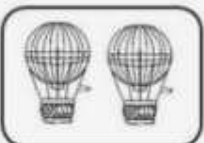


Fișă de lucru „Câte obiecte sunt?”

Grupa 1

Grupa nr. 1



Câte obiecte sunt reprezentate în fiecare imagine de mai jos?

| | | |
|---|---|--------------------------------|
|  |  | $2 + 3 =$ <input type="text"/> |
|  |  | $4 + 4 =$ <input type="text"/> |
|  |  | $1 + 3 =$ <input type="text"/> |
|  |  | $3 + 4 =$ <input type="text"/> |
|  |  | $2 + 2 =$ <input type="text"/> |
|  |  | $5 + 3 =$ <input type="text"/> |

(Imagine: <https://www.pinterest.es/pin/420031102754174449/>)

Expert suport educațional matematică/ informatică: Manea Roxana-Maria